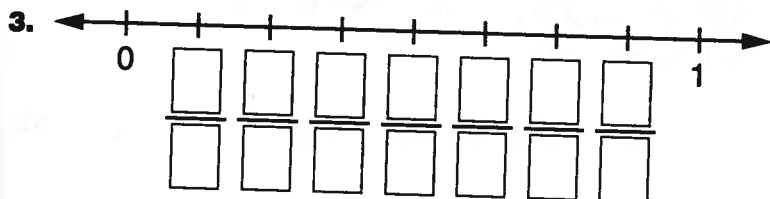
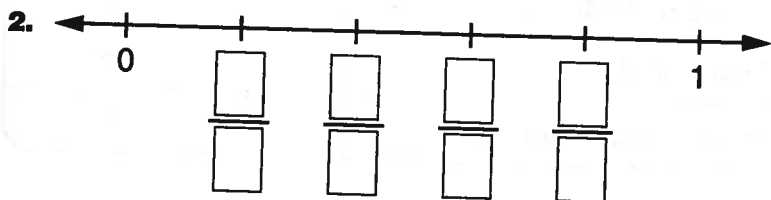
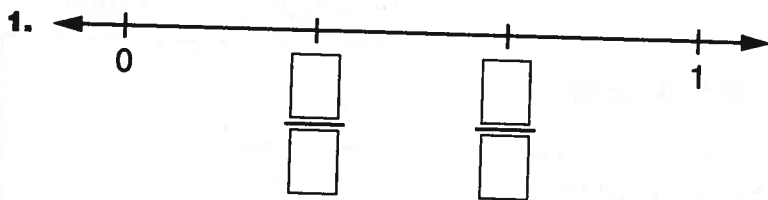


LESSON
7·10
Identifying Fractions on a Number Line


Label each number line with the correct fractions.



4. Draw and label the following points on this number line. The first one is done for you.

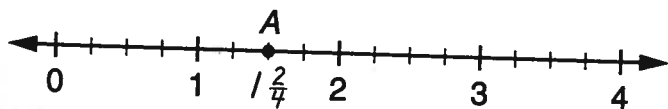
A: $1\frac{2}{4}$

B: $\frac{1}{4}$

C: $\frac{4}{4}$

D: $\frac{8}{4}$

E: $2\frac{3}{4}$



5. Jay, Kay, and Mae are in a 3-mile walk-a-thon. So far, Jay has walked $\frac{3}{4}$ mi, Kay has walked $1\frac{1}{2}$ mi, and Mae has walked $\frac{5}{2}$ mi. Draw and label points on the number line below to show their approximate locations.

